







Name : \_\_\_\_\_

# Counting Coins & Notes

Up to £10: S3

Count the money and write the total amount.

<p>1)</p>  <p>£ _____</p>	
<p>2)</p>  <p>£ _____</p>	
<p>3)</p>  <p>£ _____</p>	
<p>4)</p>  <p>£ _____</p>	
<p>5)</p>  <p>£ _____</p>	
<p>6)</p>  <p>£ _____</p>	

**PREVIEW**

Gain complete access to the largest collection of worksheets in all subjects!

Members, please log in to download this worksheet.

Not a member? Please sign up to gain complete access.

[www.mathworksheets4kids.com](http://www.mathworksheets4kids.com)