

Name : _____

Counting Coins & Bills

Up to \$10: S1

Count the money and write the total amount.

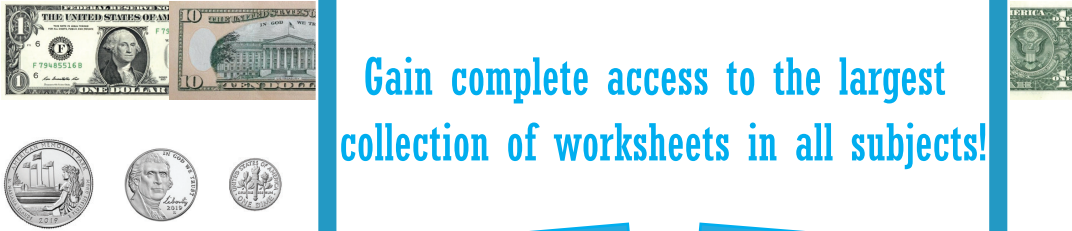
1)



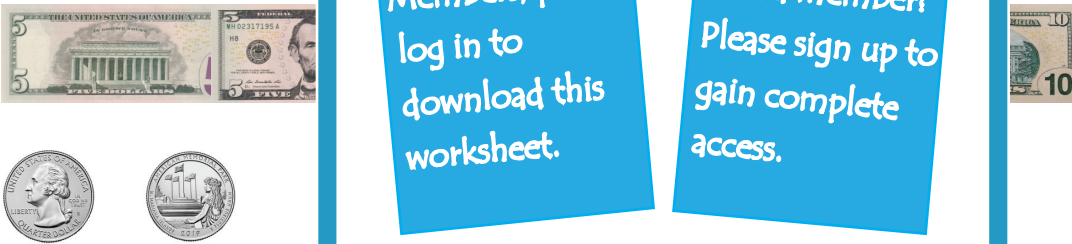
2)




3)



4)



5)



6)



PREVIEW

Gain complete access to the largest collection of worksheets in all subjects!

Members, please log in to download this worksheet.

Not a member? Please sign up to gain complete access.

www.mathworksheets4kids.com