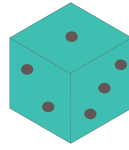
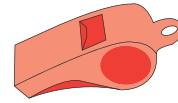


What Can You Buy?

Count the coins and circle what you can buy.



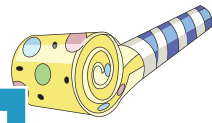

8¢



11¢




15¢




12¢



17¢



72¢



64¢



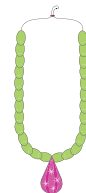
\$1.41



\$1.93




40¢




46¢



43¢



70¢



65¢



61¢

PREVIEW

Gain complete access to the largest collection of worksheets in all subjects!

Members, please log in to download this worksheet.

Not a member? Please sign up to gain complete access.

www.mathworksheets4kids.com