



# Same Amount Different Coins

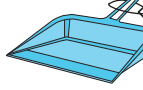
Show two different ways to make the given amount.

1) 


_____ quarters	_____ quarters
_____ dimes	_____ dimes
_____ nickels	_____ nickels
_____ pennies	_____ pennies

2) 

_____ quarters	_____ quarters
_____ dimes	_____ dimes
_____ nickels	_____ nickels
_____ pennies	_____ pennies

3) 

_____ quarters	_____ quarters
_____ dimes	_____ dimes
_____ nickels	_____ nickels
_____ pennies	_____ pennies



_____ quarters	_____ quarters
_____ dimes	_____ dimes
_____ nickels	_____ nickels
_____ pennies	_____ pennies


## PREVIEW

Gain complete access to the largest collection of worksheets in all subjects!


Members, please log in to download this worksheet.

Not a member? Please sign up to gain complete access.

[www.mathworksheets4kids.com](http://www.mathworksheets4kids.com)

5) 

_____ quarters	_____ quarters
_____ dimes	_____ dimes
_____ nickels	_____ nickels
_____ pennies	_____ pennies



_____ quarters	_____ quarters
_____ dimes	_____ dimes
_____ nickels	_____ nickels
_____ pennies	_____ pennies