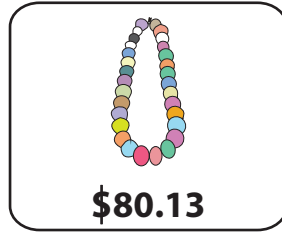



# Cheap or Expensive?

A) Identify and check the cheapest item in each set.

1)



2)



3)



**PREVIEW**

Gain complete access to the largest collection of worksheets in all subjects!

Members, please log in to download this worksheet.

Not a member? Please sign up to gain complete access.

[www.mathworksheets4kids.com](http://www.mathworksheets4kids.com)




B) Identify and check the cheapest item in each set.

1)



2)



3)

