

**Cheap or Expensive?**

A) Identify and check the cheapest item in each set.


1)

**\$11.95****\$12.88****\$14.65****\$11.99**

2)

**\$29.91****\$20.85**

3)

**\$33.10****\$34.20**

# PREVIEW

Gain complete access to the largest  
collection of worksheets in all subjects!

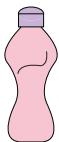
Members, please  
log in to  
download this  
worksheet.

Not a member?  
Please sign up to  
gain complete  
access.

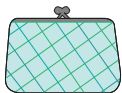
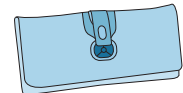
[www.mathworksheets4kids.com](http://www.mathworksheets4kids.com)

B) Identify and check the cheapest item in each set.


1)

**\$8.97****\$9.98**

2)

**\$19.97****\$19.91****\$19.99****\$19.95**

3)

**\$63.91****\$64.55****\$60.25****\$61.42**