

Name: _____


Who has More?

How much money does each child have in her/his pouch? Use < or > symbols to figure out who has more?


1) Olivia has \$ _____



Sandra has \$ _____



2) Charlotte has \$ _____



PREVIEW


Gain complete access to the largest collection of worksheets in all subjects!

Members, please log in to download this worksheet.


Not a member? Please sign up to gain complete access.

www.mathworksheets4kids.com

_____ has \$ _____




3) Henry has \$ _____



_____ has \$ _____




4) Ellie has \$ _____



_____ has \$ _____



5) Amelia has \$ _____



Emma has \$ _____

