

Name: \_\_\_\_\_

# Is There Enough Money?

Calculate the money in Mia's bank. Check the items that she does have enough money to buy.



The total amount of money in the bank is \$ \_\_\_\_\_





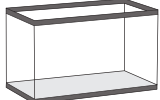
# PREVIEW

Gain complete access to the largest collection of worksheets in all subjects!

Members, please log in to download this worksheet.

Not a member? Please sign up to gain complete access.

[www.mathworksheets4kids.com](http://www.mathworksheets4kids.com)

S.No		Items that Mia can buy
1)		
2)		
3)		
4)	 <span style="margin-left: 20px;">\$27.52</span>	
5)	 <span style="margin-left: 20px;">\$35.00</span>	