

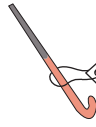




Ordering Money

A) Arrange the price from the least to the greatest.

1)

 \$10.94	 \$59.35	 \$35.18	 \$16.49	 \$42.36
---	---	---	--	---

2)

 \$36.92	 \$65.00	 \$59.00	 \$37.29	 \$18.43
---	---	---	--	---

3)

 \$13.65		 \$15.56
--	--	--

B) Arrange the price

1)

 \$24.78		 \$24.98
---	---	---

2)

 \$21.16			 \$53.14	 \$18.14
---	---	---	--	---

3)

 \$7.92	 \$20.42	 \$39.88	 \$15.72	 \$22.32
--	---	---	--	---

PREVIEW

Gain complete access to the largest collection of worksheets in all subjects!

Members, please log in to download this worksheet.

Not a member? Please sign up to gain complete access.

www.mathworksheets4kids.com