






# Ordering Money

A) Arrange the price from the least to the greatest.

1)	 \$29.59	 \$11.99	 \$14.95	 \$9.39	 \$17.93
----	---	---	---	---	---

\_\_\_\_\_

2)	 \$19.56	 \$49.46	 \$42.56	 \$19.65	 \$18.56
----	---	---	---	--	---

\_\_\_\_\_

3)	 \$34.15		 \$28.18
----	--	--	--

\_\_\_\_\_






B) Arrange the price

1)	 \$58.60		 \$13.70
----	---	---	---

\_\_\_\_\_

2)	 \$25.43			 \$27.83
----	---	---	---	---

\_\_\_\_\_

3)	 \$16.30	 \$42.10	 \$35.20	 \$34.70	 \$42.40
----	---	---	---	--	---

\_\_\_\_\_

## PREVIEW

Gain complete access to the largest collection of worksheets in all subjects!

Members, please log in to download this worksheet.

Not a member? Please sign up to gain complete access.

[www.mathworksheets4kids.com](http://www.mathworksheets4kids.com)