










# Making Change


Calculate the change for each set of items you buy.

					
\$14.92	\$2.32	\$1.94	\$15.69	\$45.07	\$2.26



1)  + 7  \_\_\_\_\_

2) 4  + 5 \_\_\_\_\_

3) 9  + 3 \_\_\_\_\_

4) 6  + \_\_\_\_\_

5) 2  + 8  \_\_\_\_\_

6)  +  \_\_\_\_\_

## PREVIEW

Gain complete access to the largest collection of worksheets in all subjects!

Members, please log in to download this worksheet.

Not a member? Please sign up to gain complete access.

[www.mathworksheets4kids.com](http://www.mathworksheets4kids.com)