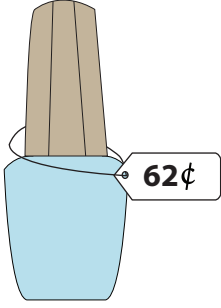
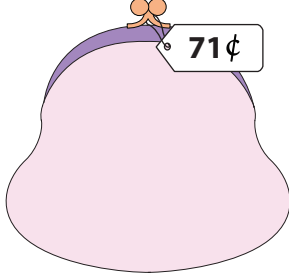
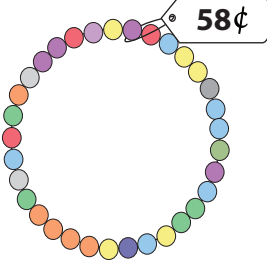



## What is Your Change?

You pay \$1 for each item. Show the change you receive, with minimum number of coins.

1)  \_\_\_\_\_ quarters  
 \_\_\_\_\_ dimes  
 \_\_\_\_\_ nickels  
 \_\_\_\_\_ pennies

2)  \_\_\_\_\_ quarters  
 \_\_\_\_\_ dimes  
 \_\_\_\_\_ nickels  
 \_\_\_\_\_ pennies

3)  \_\_\_\_\_ quarters  
 \_\_\_\_\_ dimes  
 \_\_\_\_\_ nickels  
 \_\_\_\_\_ pennies

5)  \_\_\_\_\_ quarters  
 \_\_\_\_\_ dimes  
 \_\_\_\_\_ nickels  
 \_\_\_\_\_ pennies

# PREVIEW

Gain complete access to the largest collection of worksheets in all subjects!

Members, please log in to download this worksheet.

Not a member? Please sign up to gain complete access.

[www.mathworksheets4kids.com](http://www.mathworksheets4kids.com)

7) You pay with \$1 for an eraser that costs 30¢. Write your change in minimum number of coins.

\_\_\_\_\_ quarters ; \_\_\_\_\_ dimes ; \_\_\_\_\_ nickels

8) You pay with \$1 for a spoon that costs 24¢. Write your change in minimum number of coins.

\_\_\_\_\_ dimes ; \_\_\_\_\_ nickels ; \_\_\_\_\_ pennies