



Name : _____

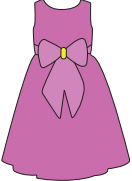
It's Time for Change


Sheet 1

1) You bought  for \$21.98.

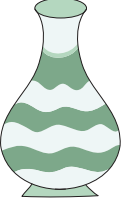
You paid  .

You got back _____

2) You bought  for \$16.00.

You paid  .

You got back _____

3) You bought  for \$8.39.

You paid _____

You got back _____


PREVIEW

Gain complete access to the largest collection of worksheets in all subjects!

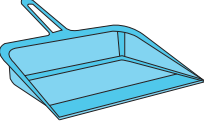
Members, please log in to download this worksheet.

Not a member? Please sign up to gain complete access.

www.mathworksheets4kids.com


4) You paid  .

You got back _____

5) You bought  for \$1.76.

You paid _____

You got back _____

6) You paid  .

You got back _____

7) Mrs. Williams picked an egg carton priced at \$4.99. She handed a five dollar bill to the cashier. How much change would the cashier return?

8) The Smiths were at the home appliance store, Mr. Smith bought a microwave oven worth \$89.99. He paid a hundred-dollar bill at the checkout counter. How much change did he receive?
