



Name : \_\_\_\_\_


# It's Time for Change


Sheet 2

1) You bought  for \$5.59.

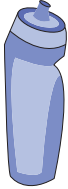
You paid  .

You got back \_\_\_\_\_

2) You bought  for \$14.32.

You paid  .

You got back \_\_\_\_\_

3) You bought  for \$17.21.

You paid \_\_\_\_\_

You got back \_\_\_\_\_


**PREVIEW**

Gain complete access to the largest collection of worksheets in all subjects!


Members, please log in to download this worksheet.

Not a member? Please sign up to gain complete access.

[www.mathworksheets4kids.com](http://www.mathworksheets4kids.com)


4) You paid  .

You got back \_\_\_\_\_

5) You bought  for \$49.99.

You paid \_\_\_\_\_

You got back \_\_\_\_\_

6) You paid  .

You got back \_\_\_\_\_

7) Kevin buys an alarm clock that costs \$17.75 and pays with a twenty dollar bill. How much change did he receive?

\_\_\_\_\_

8) Mr. Anderson went to the store to buy Juan a bike. The bike cost \$89.00, and he made the payment with a hundred-dollar bill. How much change was given to Mr. Anderson?

\_\_\_\_\_