



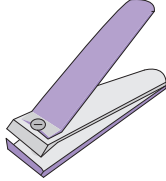
Name : \_\_\_\_\_


# It's Time for Change

1) You bought  for \$17.95.


You paid  .

You got back \_\_\_\_\_

2) You bought  for \$3.14.

You paid  .

You got back \_\_\_\_\_

3) You bought  for \$65.00.

You paid \_\_\_\_\_

You got back \_\_\_\_\_


**PREVIEW**

Gain complete access to the largest collection of worksheets in all subjects!


Members, please log in to download this worksheet.

Not a member? Please sign up to gain complete access.

[www.mathworksheets4kids.com](http://www.mathworksheets4kids.com)


4) You paid  .

You got back \_\_\_\_\_

5) You bought  for \$9.10.

You paid \_\_\_\_\_

You got back \_\_\_\_\_

6) You paid  .

You got back \_\_\_\_\_

7) Rhea bought a hat worth \$9.99 and paid with a ten dollar bill. How much change did Rhea receive?

\_\_\_\_\_

8) Scarlett went to a store to buy a pack of crayons. The pack cost \$3.56 and she handed a five-dollar bill to the storekeeper. How much did Scarlett get?

\_\_\_\_\_