

Name : _____

Money Conversion

A) Convert cents to dollars.

1) 583¢ = _____

2) 64¢ = _____

3) 447¢ = _____

4) 210¢ = _____

5) 89¢ = _____

6) 5¢ = _____

7)  900¢ = _____

9) Cole bought a pack of _____
the pack?

_____ dollars did he pay to buy

PREVIEW

Gain complete access to the largest
collection of worksheets in all subjects!

Members, please
log in to
download this
worksheet.

Not a member?
Please sign up to
gain complete
access.

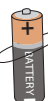
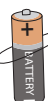
www.mathworksheets4kids.com



B) Convert dollars to cents.

1) \$6.06 = _____

3) \$0.35 = _____

5) \$8.68 = _____

7)  \$0.63 =  _____

8)  \$9.59 =  _____

9) Emma saves \$4.25 in her piggy bank. How many cents does Emma have in her piggy bank?
