



Let's Go Shopping!

FOOD STORE

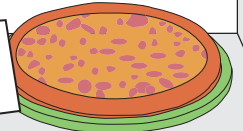
\$11.50




\$3.63



\$15.00



\$4.79



PREVIEW


Gain complete access to the largest collection of worksheets in all subjects!

Members, please log in to download this worksheet.

Not a member? Please sign up to gain complete access.

www.mathworksheets4kids.com

\$63.92



\$5.00

1) John buys a sandwich.
What is the price of the sandwich?
How much change did he receive?

2) Robert buys a cake. He pays the cashier \$70.00.
What is the price of the cake?
How much change did he receive?

\$70.00

3) Susan buys a pizza. She pays the cashier \$20.00.
What is the price of the pizza?
How much change did she receive?

\$20.00

4) William buys a tub of popcorn. He pays the cashier \$50.00.
What is the price of the popcorn?
How much change did he receive?

\$50.00

5) Maria buys a loaf of bread. She pays the cashier \$15.00.
What is the price of the bread?
How much change did she receive?

\$15.00
