

Name : \_\_\_\_\_

ES2

# Let's Go Shopping!

## SPORTING GOODS STORE

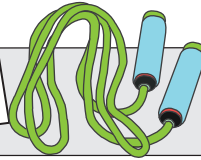
\$17.42




\$12.50



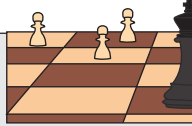
\$9.87



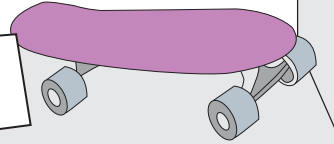
\$11.99



\$22.00



5.85



# PREVIEW

Gain complete access to the largest collection of worksheets in all subjects!

Members, please log in to download this worksheet.

Not a member? Please sign up to gain complete access.

[www.mathworksheets4kids.com](http://www.mathworksheets4kids.com)

1)

Ethan buys a skateboard. He pays the cashier \$40.00.  
What is the price of the skateboard?  
How much change did he receive?

\$40.00

\_\_\_\_\_  
\_\_\_\_\_

2)

Susan buys a skipping rope. She pays the cashier \$50.00.  
What is the price of the skipping rope?  
How much change did she receive?

\$50.00

\_\_\_\_\_  
\_\_\_\_\_

3)

Michael buys a soccer ball. He pays the cashier \$15.00.  
What is the price of the soccer ball?  
How much change did he receive?

\$15.00

\_\_\_\_\_  
\_\_\_\_\_

4)

Richard buys a baseball bat. He pays the cashier \$100.00.  
What is the price of the baseball bat?  
How much change did he receive?

\$100.00

\_\_\_\_\_  
\_\_\_\_\_

5)

Nancy buys a basketball. She pays the cashier \$50.00.  
What is the price of the basketball?  
How much change did she receive?

\$50.00

\_\_\_\_\_  
\_\_\_\_\_