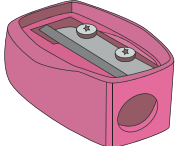







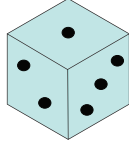



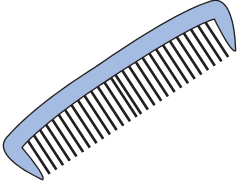



Making Change

Count the coins and write the change for each purchase.

1)	 <p>6¢</p>		_____ ¢
2)	 <p>72¢</p>		_____ ¢
3)	 <p>25¢</p>		_____ ¢
4)	 <p>70¢</p>		_____ ¢
5)	 <p>8¢</p>		_____ ¢
6)	 <p>64¢</p>		_____ ¢
7)	 <p>31¢</p>		_____ ¢