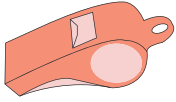



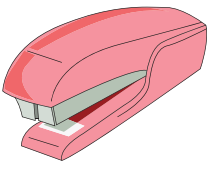











Making Change

Count the coins and write the change for each purchase.

1)	 <p>11¢</p>		_____ ¢
2)	 <p>47¢</p>		_____ ¢
3)			_____ ¢
4)			_____ ¢
5)			_____ ¢
6)	 <p>35¢</p>		_____ ¢
7)	 <p>17¢</p>		_____ ¢

PREVIEW

Gain complete access to the largest collection of worksheets in all subjects!

Members, please log in to download this worksheet.

Not a member? Please sign up to gain complete access.

www.mathworksheets4kids.com