









## Making the Right Choice

Store 1 and Store 2 offer same products at different prices. Compare the price and figure out how much James saved or lost.

| <b>Store 1</b>  |   |   | <b>Store 2</b>  |   |   |
|---|---|---|---|---|---|
|   |  |  |    |  |  |
| <b>\$22.48</b>  | <b>\$35.96</b>  | <b>\$75.40</b>  | <b>\$11.46</b>  | <b>\$18.08</b>  | <b>\$36.68</b>  |
|  |   |   |  |   |   |
| <b>\$17.59</b>  |   |   | <b>\$75.58</b>  |   |   |






# PREVIEW

Gain complete access to the largest collection of worksheets in all subjects!

Members, please log in to download this worksheet.

Not a member? Please sign up to gain complete access.

www.mathworksheets4kids.com

| <b>Item</b>   |          |  | <b>Amount Lost</b> |
|---|----------|--|--------------------|
|  |          |  |                    |
|  |          |  |                    |
|  |          |  |                    |
|  | <b>1</b> |  |                    |
|  | <b>2</b> |  |                    |