


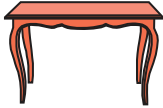


Name : _____

Furniture Showroom

Sheet 2

James visited furniture showroom and saw a tally chart with the information about availability of different kinds of furniture. Answer the questions using tally chart.

Furniture	Tally Marks
 Sofa	
 Chair	
	
	

PREVIEW

Gain complete access to the largest collection of worksheets in all subjects!

Members, please log in to download this worksheet.

Not a member? Please sign up to gain complete access.

www.mathworksheets4kids.com

1) How many sofa are there?

2) How many cot are there?

3) How many more chairs are there than tables?

4) Which kind is the most available furniture?

5) How many furniture are there in total?