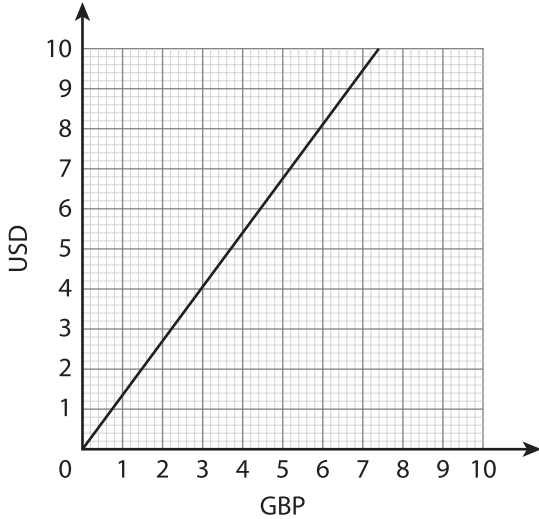


Currency Conversion

Read the graphs and answer the questions.

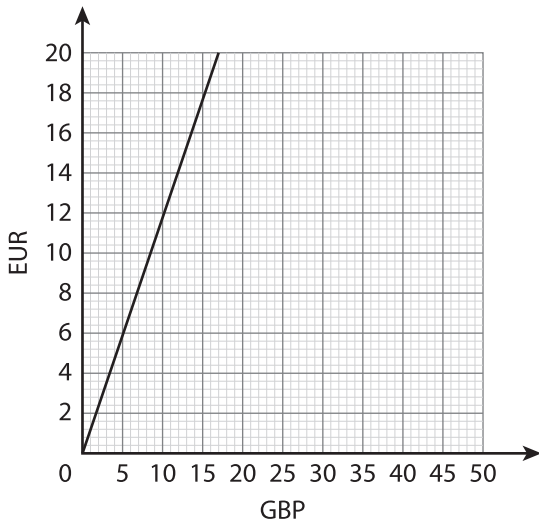
1) Conversion Graph for GBP and USD.



a) Using the graph, convert 4 GBP to USD.

b) Find the value of 10 USD in GBP.

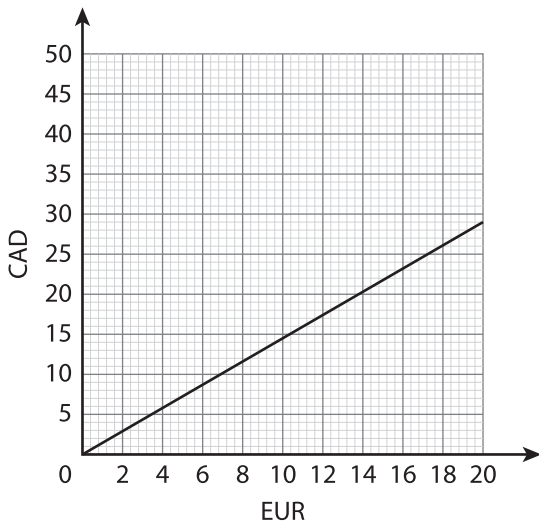
2) Conversion Graph for GBP and EUR.



a) Convert 5 GBP to EUR.

b) Convert 20 EUR to GBP.

3) Conversion Graph for EUR and CAD.



a) Use the graph and convert 18 EUR to CAD.

b) 15 CAD = _____ EUR