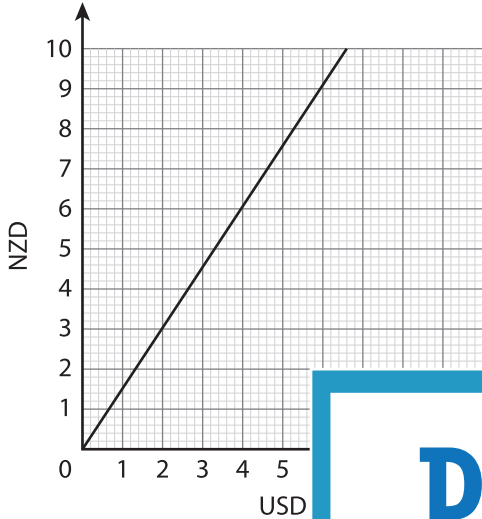


Currency Conversion

Read the graphs and answer the questions.

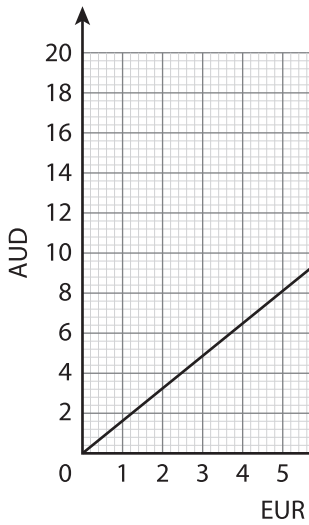
1) Conversion Graph for NZD and USD.



a) 5 USD = _____ NZD

b) Use the graph and convert 10 NZD to USD.

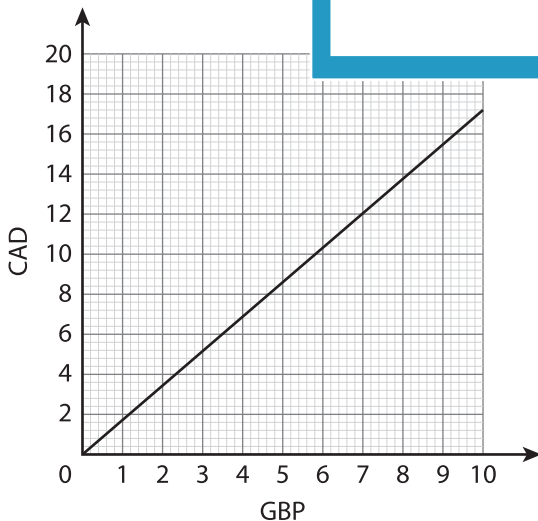
2) Conversion Graph



_____ EUR.

_____ AUD.

3) Conversion Graph



_____ CAD in GBP.

b) Using the graph, convert 7 GBP to CAD.

PREVIEW

Gain complete access to the largest collection of worksheets in all subjects!

Members, please log in to download this worksheet.

Not a member? Please sign up to gain complete access.

www.mathworksheets4kids.com