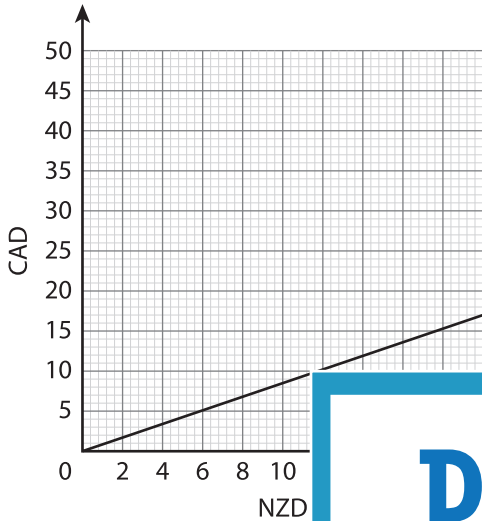


Currency Conversion

Read the graphs and answer the questions.

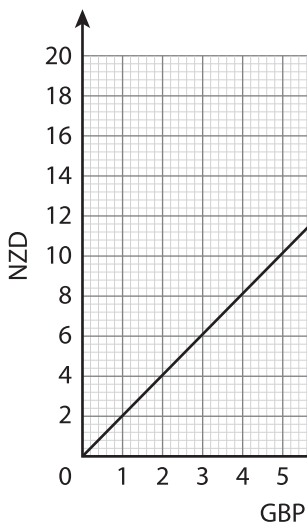
1) Conversion Graph for CAD and NZD.



a) Convert 6 NZD to CAD.

b) Convert 17 CAD to NZD.

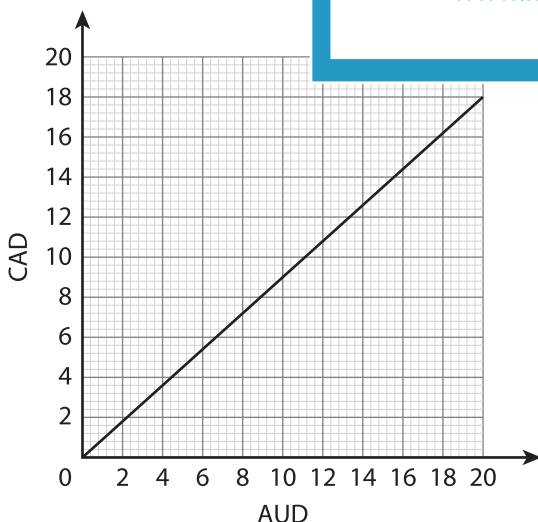
2) Conversion Graph



Convert 9 GBP to NZD.

_____ GBP

3) Conversion Graph



Using the graph, convert 8 AUD to CAD.

b) Find the value of 14 CAD in AUD.

PREVIEW

Gain complete access to the largest collection of worksheets in all subjects!

Members, please log in to download this worksheet.

Not a member? Please sign up to gain complete access.

www.mathworksheets4kids.com