

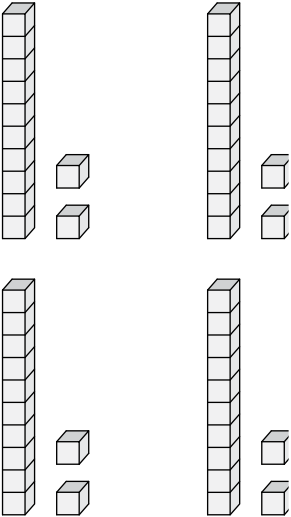
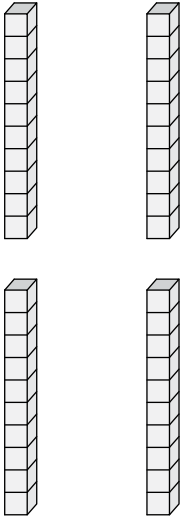
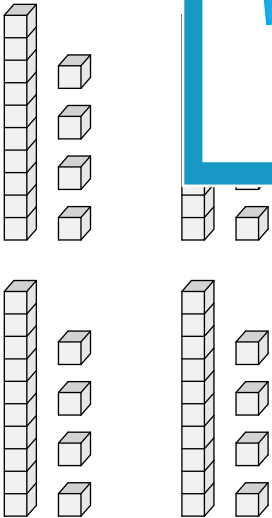
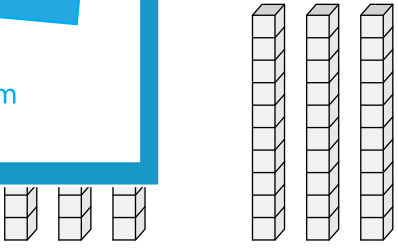


Name : \_\_\_\_\_

# Dividing Decimals by Whole Numbers

Find the quotient using the visual models.

	Tenths		Hundredths
-----------------------------------------------------------------------------------	--------	-----------------------------------------------------------------------------------	------------

<p>1)</p>  <p><math>0.72 \div 6 = \underline{\hspace{2cm}}</math></p>	<p>2)</p>  <p><math>0.6 \div 2 = \underline{\hspace{2cm}}</math></p>
<p>3)</p>  <p><math>0.56 \div 4 = \underline{\hspace{2cm}}</math></p>	 <p><math>0.6 \div 2 = \underline{\hspace{2cm}}</math></p>

**PREVIEW**

Gain complete access to the largest collection of worksheets in all subjects!

Members, please log in to download this worksheet.

Not a member? Please sign up to gain complete access.

[www.mathworksheets4kids.com](http://www.mathworksheets4kids.com)