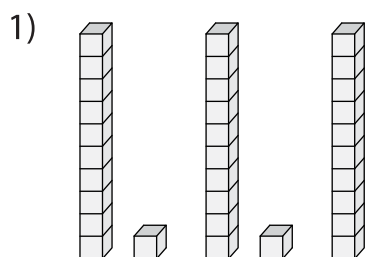
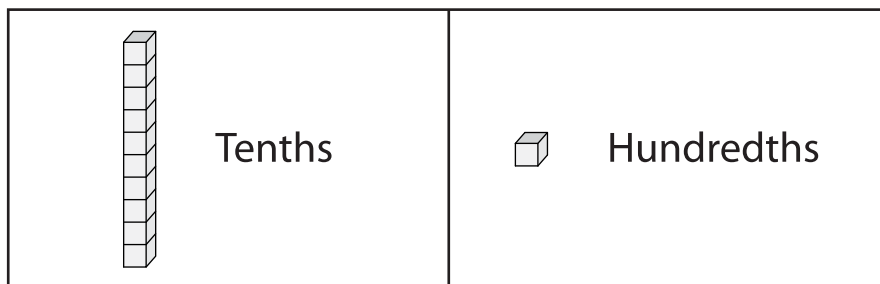


Name : _____

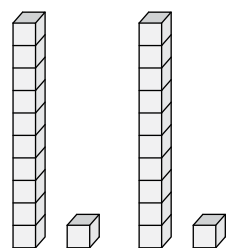
Dividing Decimals by Whole Numbers

Sheet 3

Find the quotient using the visual models.



$$0.99 \div 9 = \underline{\hspace{2cm}}$$



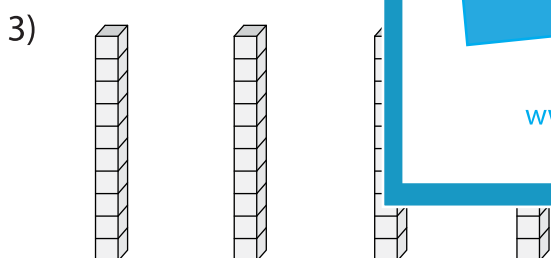
PREVIEW

Gain complete access to the largest collection of worksheets in all subjects!

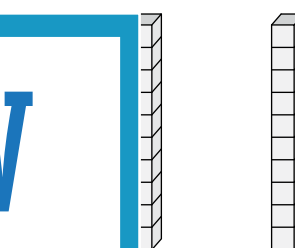
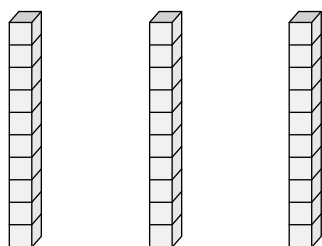
Members, please log in to download this worksheet.

Not a member? Please sign up to gain complete access.

www.mathworksheets4kids.com



$$0.7 \div 7 = \underline{\hspace{2cm}}$$



$$0.42 \div 3 = \underline{\hspace{2cm}}$$

