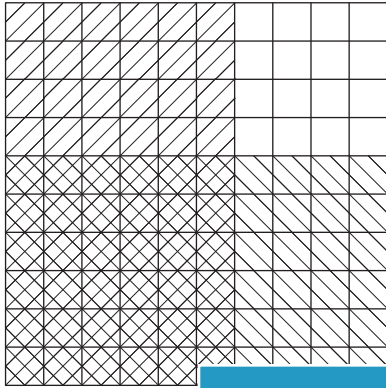


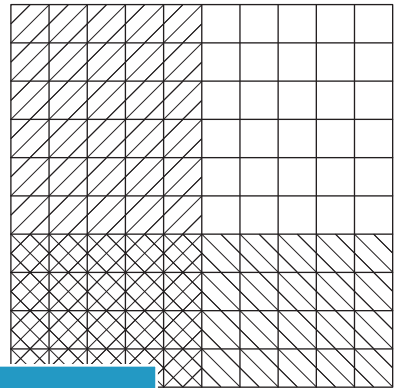
Multiplying Decimals

A) Find the product of the decimals using the grid.

1)



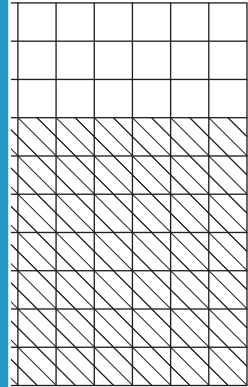
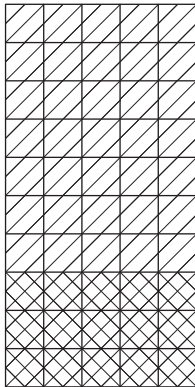
2)



$0.6 \times 0.6 =$

$=$ _____

3)



$0.8 \times 0.3 =$

$=$ _____

PREVIEW

Gain complete access to the largest collection of worksheets in all subjects!


Members, please log in to download this worksheet.

Not a member? Please sign up to gain complete access.

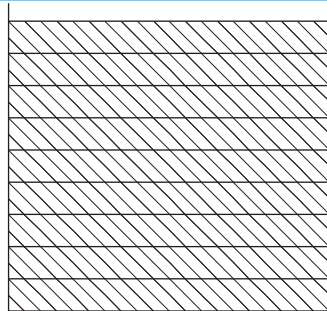
www.mathworksheets4kids.com

B) Complete the multiplication

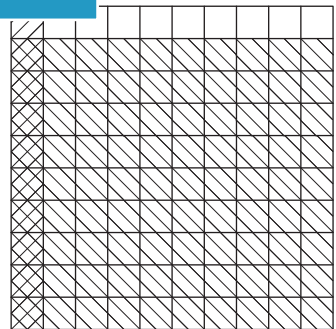
1)



×



=



×

=
