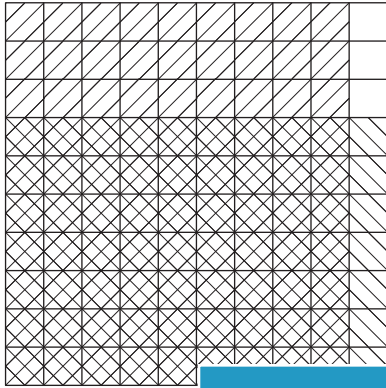



# Multiplying Decimals

A) Find the product of the decimals using the grid.

1)



2)

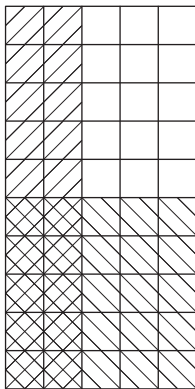


$0.9 \times 0.7 =$

# PREVIEW

= \_\_\_\_\_

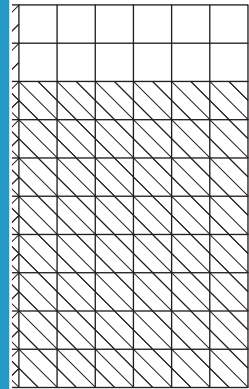
3)



Gain complete access to the largest collection of worksheets in all subjects!

Members, please log in to download this worksheet.

Not a member? Please sign up to gain complete access.




$0.2 \times 0.5 =$


= \_\_\_\_\_

B) Complete the multiplication


1)



×



=



\_\_\_\_\_

×

\_\_\_\_\_

=

\_\_\_\_\_