


Ordering Decimals

Decreasing: 53

Arrange the decimals displayed on the crown of the trees in decreasing order. Line-up the corresponding letters to solve the riddle below.

I




8.812

T



8.118

GO




8.8

M




8.218

E




8.2

NO



8.28

RY



8.1

PREVIEW

Gain complete access to the largest
collection of worksheets in all subjects!

Members, please
log in to
download this
worksheet.

Not a member?
Please sign up to
gain complete
access.

www.mathworksheets4kids.com

What kind of tree does a math teacher climb?
