



# Ordering Decimals

Increasing: S1

Arrange the decimals displayed on the horses in increasing order. Line-up the corresponding letters to solve the riddle below.

**G****B****N**




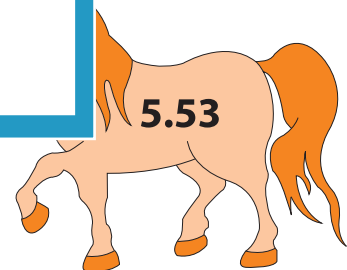
## PREVIEW

Gain complete access to the largest collection of worksheets in all subjects!

Members, please log in to download this worksheet.

Not a member? Please sign up to gain complete access.

[www.mathworksheets4kids.com](http://www.mathworksheets4kids.com)

**R****I****5.05****5.53**

What do you call a horse that lives next door?

---