




Name : _____

Missing Amount

Sheet 2

A) Find the missing marked price, selling price, or discount.

S.No	Marked price	Discount	Selling price
1)		\$10	
2)			\$25
3)			\$8,900

B) Find the missing

S.No	Marked price	Discount	Selling price
1)	\$.		\$295
2)	\$18,010	\$120	
3)		\$95	\$4,511
4)		\$3	\$16

PREVIEW

Gain complete access to the largest collection of worksheets in all subjects!

Members, please log in to download this worksheet.

Not a member? Please sign up to gain complete access.

www.mathworksheets4kids.com