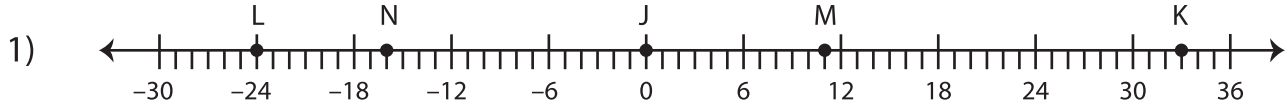


Length of the Line Segments

Use the number line to find the length.



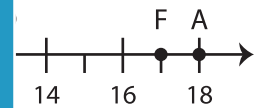
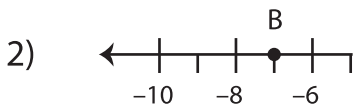
a) LM = 35 units

d) NK - JM = _____

b) JK + NJ = _____

e) LN = _____

c) JM = _____



a) GD - HD = _____

= _____

b) EF = _____

= _____

c) CH + DF = _____

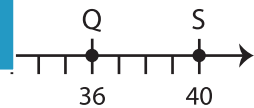
PREVIEW

Gain complete access to the largest collection of worksheets in all subjects!

Members, please log in to download this worksheet.

Not a member? Please sign up to gain complete access.

www.mathworksheets4kids.com



a) QS = _____

d) TR + PU = _____

b) RU - VP = _____

c) UQ = _____