

Length of the Line Segments

Use the number line to find the length.

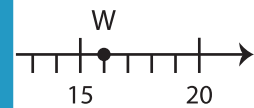
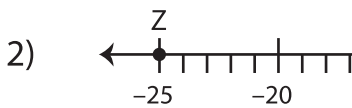


a) $KU + PV =$ 16 units

d) $WQ - QS =$ _____

b) $PK =$ _____

c) $TW =$ _____



PREVIEW
Gain complete access to the largest collection of worksheets in all subjects!

Members, please log in to download this worksheet.

Not a member? Please sign up to gain complete access.

www.mathworksheets4kids.com

a) $ZT =$ _____

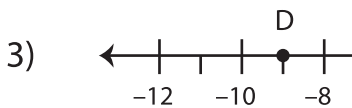
= _____

b) $UW - VX =$ _____

= _____

c) $YV =$ _____

= _____



a) $AC - BE =$ _____

d) $DF =$ _____

b) $FC =$ _____

e) $DC + FB =$ _____

c) $CE =$ _____