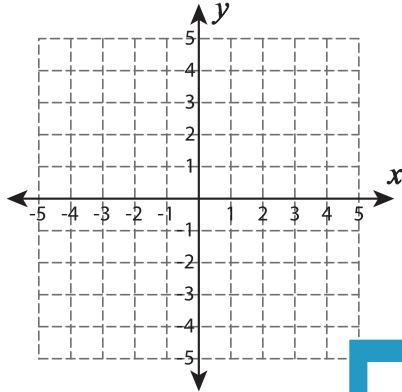


Distance Formula - Perimeter

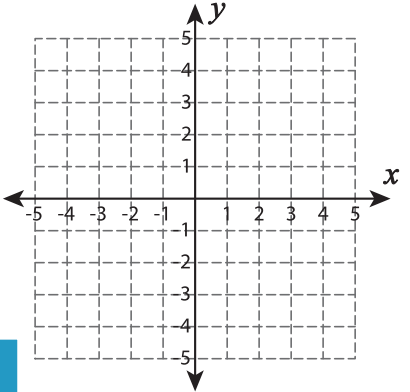
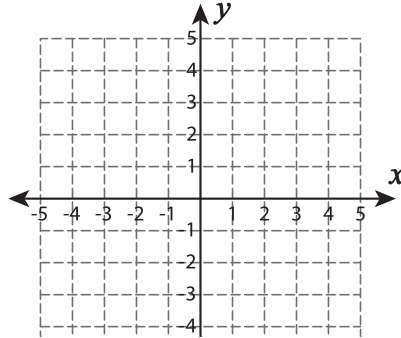
Graph the points and find the perimeter of each shape. Round the answer to two decimal places.

1) $(0, 1), (2, 1), (2, 4)$



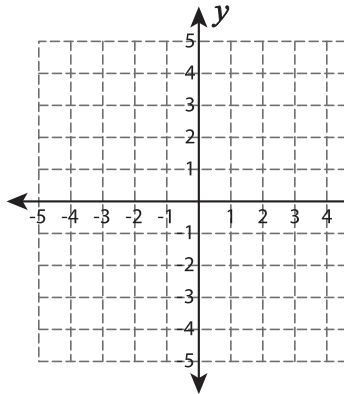
Perimeter = _____

2) $(-4, -3), (0, -3), (-1, -1), (-3, -1)$



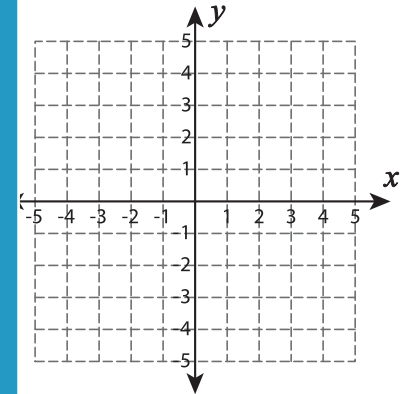
Perimeter = _____

4) $(3, -5), (5, -2), (3, 0), (1, -2)$



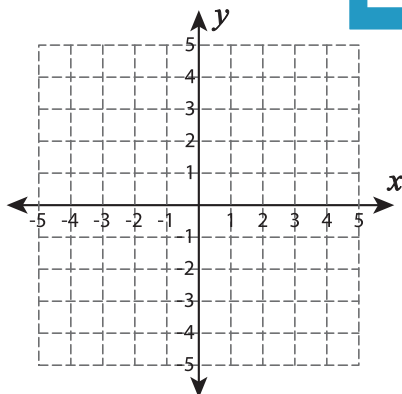
Perimeter = _____

5) $(2, 2), (5, 2), (4, 4), (1, 4)$

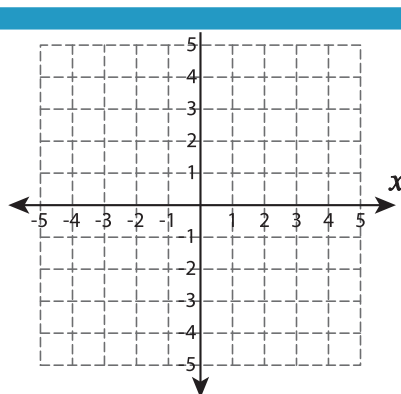


Perimeter = _____

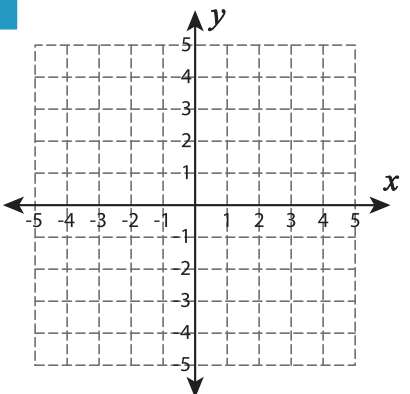
7) $(-4, -1), (-1, -1), (-1, 1), (-4, 1)$



Perimeter = _____



Perimeter = _____



Perimeter = _____

PREVIEW

Gain complete access to the largest collection of worksheets in all subjects!

Members, please log in to download this worksheet.

Not a member? Please sign up to gain complete access.

www.mathworksheets4kids.com