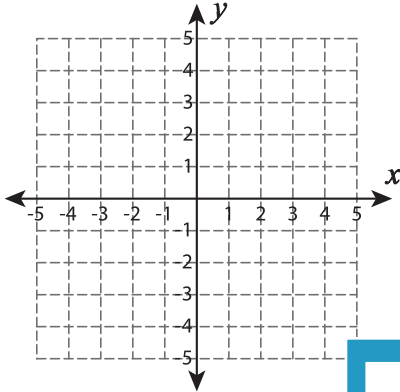


Distance Formula - Perimeter

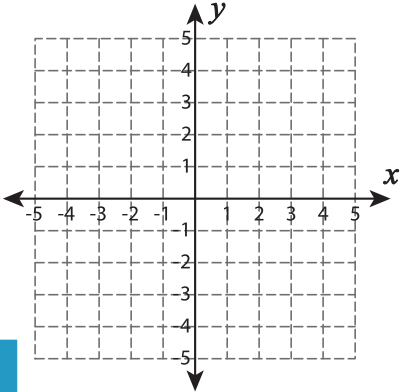
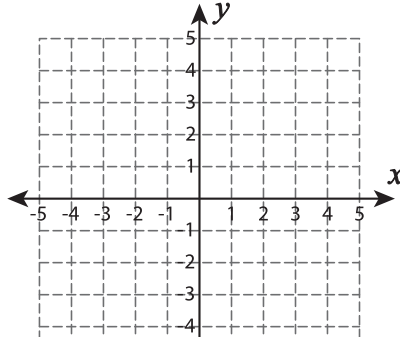
Graph the points and find the perimeter of each shape. Round the answer to two decimal places.

1) $(-5, 1), (-2, 1), (-2, 4), (-5, 4)$



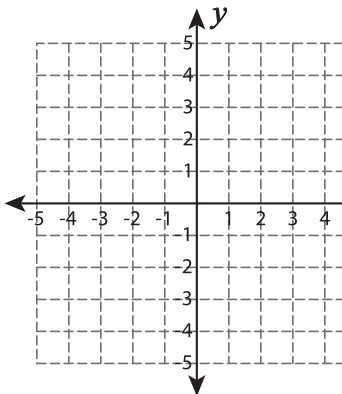
Perimeter = _____

2) $(1, -4), (4, -4), (1, 1)$



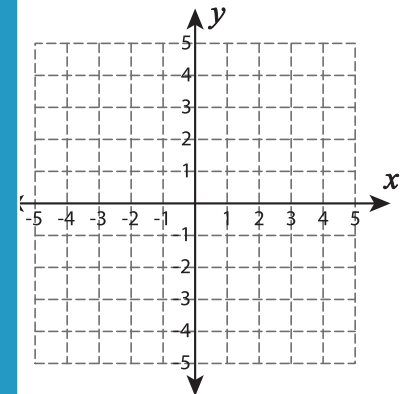
Perimeter = _____

4) $(0, -4), (0, 0), (-4, -2)$



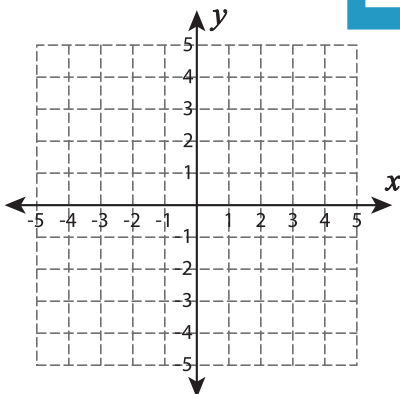
Perimeter = _____

3) $(2, 0), (4, 3), (1, 4), (-3, 3)$



Perimeter = _____

7) $(2, -1), (2, -5), (4, -4), (4, 0)$



Perimeter = _____

www.mathworksheets4kids.com

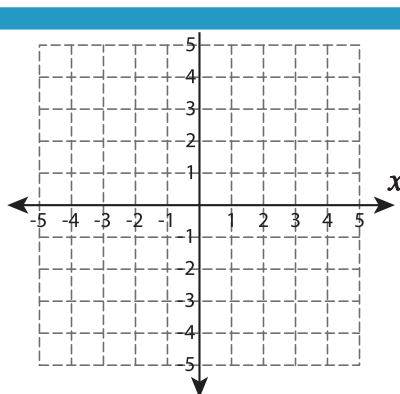
PREVIEW

Gain complete access to the largest
collection of worksheets in all subjects!

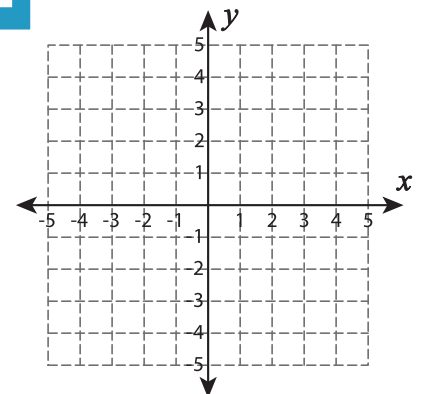
Members, please
log in to
download this
worksheet.

Not a member?
Please sign up to
gain complete
access.

3) $(-3, -1), (4, -1), (1, 2), (-3, 2)$



Perimeter = _____



Perimeter = _____