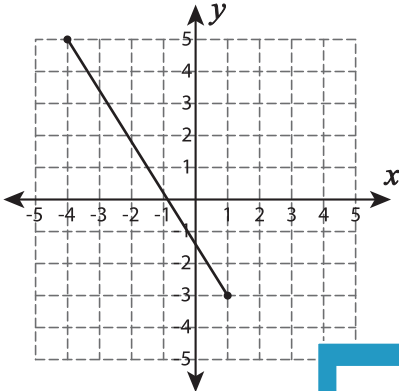


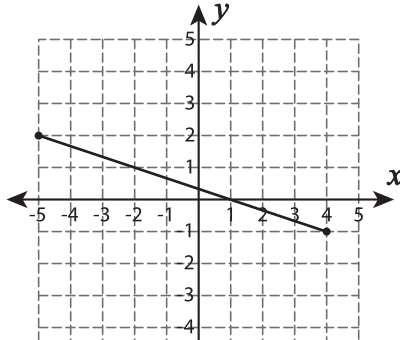
## Length - Pythagorean Theorem

Find the length of each line segment using pythagorean theorem. Verify the answer using distance formula. Round the answer to the nearest tenth.

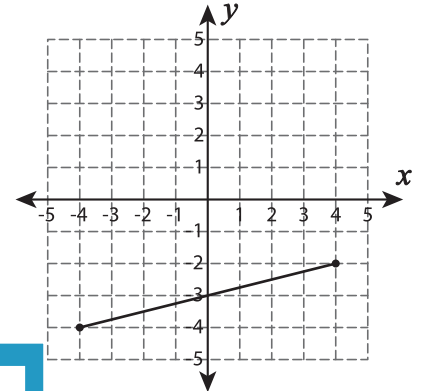
1)



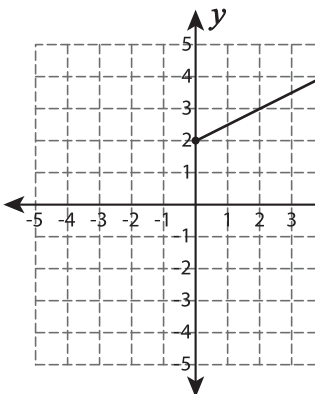
2)



3)



4)

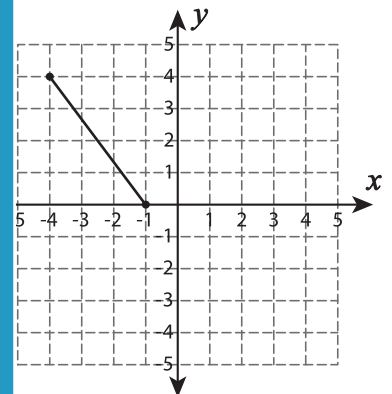


Gain complete access to the largest collection of worksheets in all subjects!

Members, please log in to download this worksheet.

Not a member? Please sign up to gain complete access.

[www.mathworksheets4kids.com](http://www.mathworksheets4kids.com)



7)

