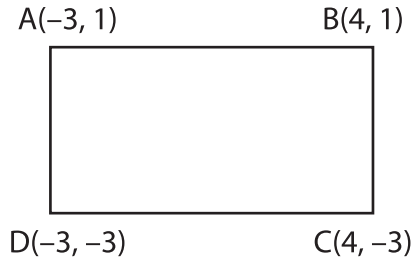


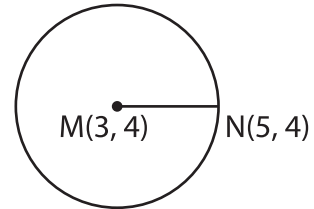
Distance Formula - Shapes

Sheet 1

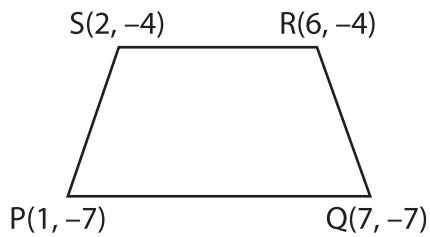
- 1) Find the length of the diagonal AC.



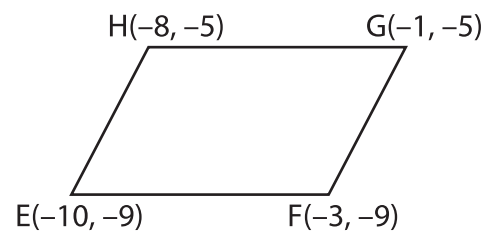
- 2) Find the radius of the circle.



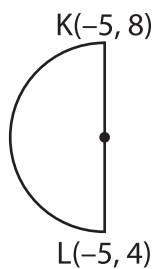
- 3) Find the length of the side PQ.



- 4) Find the length of the diagonal EG.



- 5) Find the diameter of the semicircle.



- 6) Find the length of the side XY.

