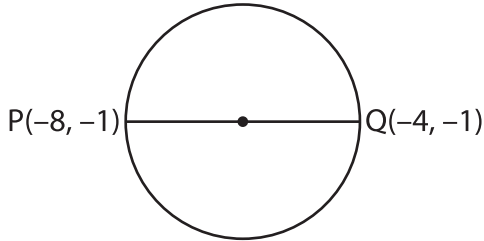
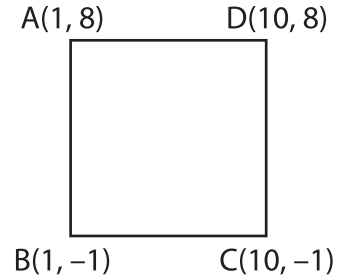


**Distance Formula - Shapes**

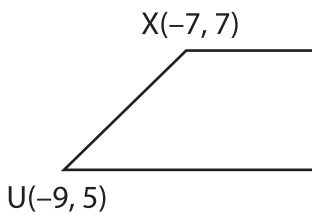
1) Find the diameter of the circle.



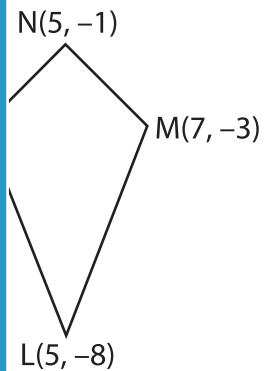
2) Find the length of the side CD.



3) Find the length of the



th of the diagonal NL.



**PREVIEW**

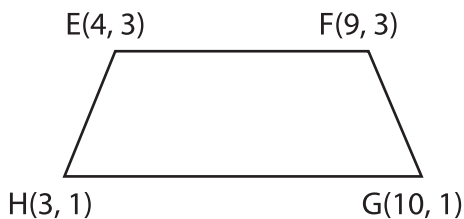
Gain complete access to the largest collection of worksheets in all subjects!

Members, please log in to download this worksheet.

Not a member? Please sign up to gain complete access.

[www.mathworksheets4kids.com](http://www.mathworksheets4kids.com)

5) Find the length of the



th of the side PQ.

