

Name : \_\_\_\_\_

## Comparing Quantities

MS1

Mia, the kingfisher likes to catch the greater quantity. Cut out the beaks from the bottom of the page and glue them in the correct boxes.

1)  $9 \div 1$



$8 \div 2$

2)  $10 \div 2$



$12 \div 3$

3)  $63 \div 7$




$35 \div 7$

4)  $28 \div 4$



$25 \div 5$

5)  $27 \div 3$




# PREVIEW



$56 \div 7$

7)  $42 \div 6$




Gain complete access to the largest collection of worksheets in all subjects!



$32 \div 4$

9)  $2 \div 2$




Members, please log in to download this worksheet.

Not a member? Please sign up to gain complete access.




$64 \div 8$

11)  $21 \div 3$



$20 \div 5$

13)  $40 \div 8$



[www.mathworksheets4kids.com](http://www.mathworksheets4kids.com)



$48 \div 6$

15)  $54 \div 9$



$28 \div 4$

16)  $56 \div 8$



$10 \div 5$

