

Name : \_\_\_\_\_

## Comparing Quantities

MS2

Roger, the alligator loves to chomp on the greater quantity. Cut out the jaws from the bottom of the page and glue them in the correct boxes.

1)  $72 \div 8$



$24 \div 4$

2)  $5 \div 1$



$12 \div 2$

3)  $15 \div 5$




$48 \div 8$

4)  $28 \div 7$



$16 \div 8$

5)  $49 \div 7$



# PREVIEW



$12 \div 4$

7)  $16 \div 4$




Gain complete access to the largest collection of worksheets in all subjects!



$42 \div 7$

9)  $18 \div 6$




Members, please log in to download this worksheet.

Not a member? Please sign up to gain complete access.



$6 \div 3$

11)  $24 \div 3$



[www.mathworksheets4kids.com](http://www.mathworksheets4kids.com)



$72 \div 9$

13)  $4 \div 2$



$14 \div 7$

15)  $63 \div 9$



$54 \div 6$

16)  $24 \div 6$



$30 \div 6$

