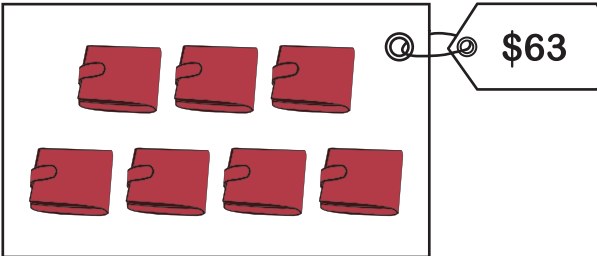


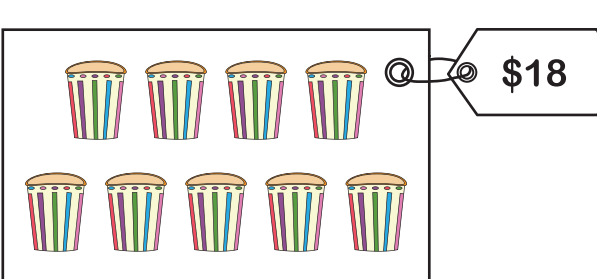
Name : _____

Division - Unit Price

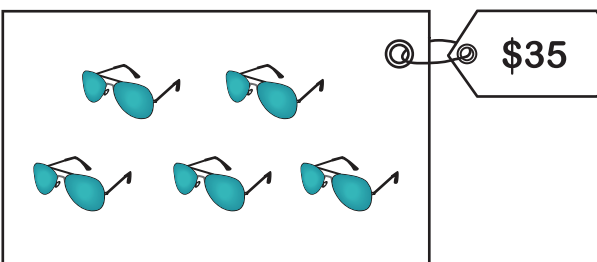
Find the price of each individual item in the package.

1) 

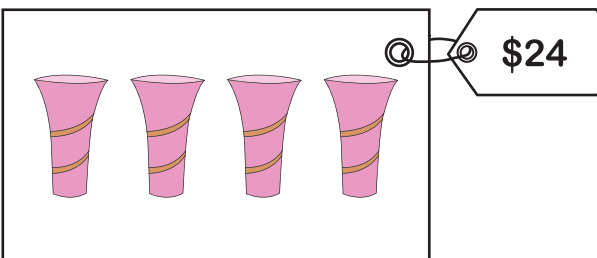
$$63 \div \underline{\quad} = \text{[tag]} \text{ [glove]}$$

2) 


$$18 \div \underline{\quad} = \text{[tag]} \text{ [ice cream cone]}$$

3) 

$$35 \div \underline{\quad} = \text{[tag]} \text{ [pair of sunglasses]}$$

4) 

$$24 \div \underline{\quad} = \text{[tag]} \text{ [water bottle]}$$

5) 

$$12 \div \underline{\quad} = \text{[tag]} \text{ [rocking horse]}$$

6) A pack of shampoo bottles costs \$10. There are 2 shampoo bottles in the pack. How much does each shampoo bottle cost?
