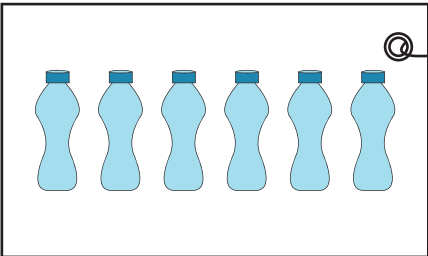



Name : _____

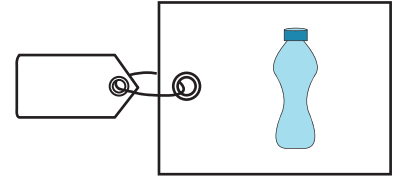
Division - Unit Price

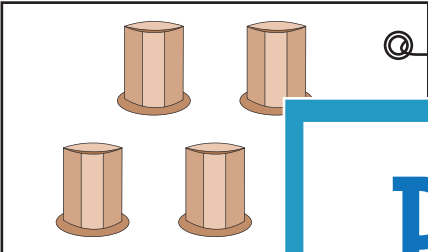

Sheet 2

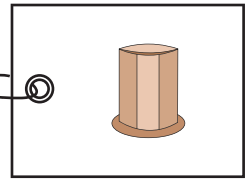
Find the price of each individual item in the package.

1)  

$$36 \div \underline{\quad} =$$

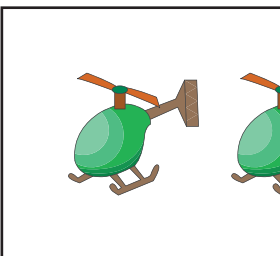



2)  




3) 



4) 



5) 

$$21 \div \underline{\quad} =$$



6) A pack of candies costs \$12. If there are 3 candies in the pack, what is the price of each candy?

PREVIEW

Gain complete access to the largest collection of worksheets in all subjects!

Members, please log in to download this worksheet.

Not a member? Please sign up to gain complete access.

www.mathworksheets4kids.com