


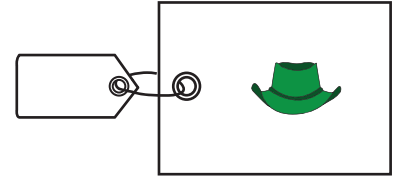
Name : \_\_\_\_\_


## Division - Unit Price

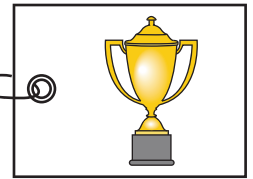
Find the price of each individual item in the package.

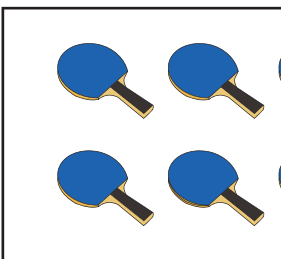
1) 


$$56 \div \underline{\quad} =$$

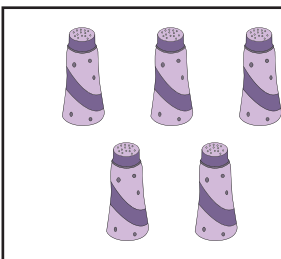


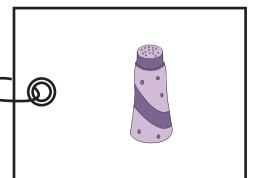
2) 




3) 

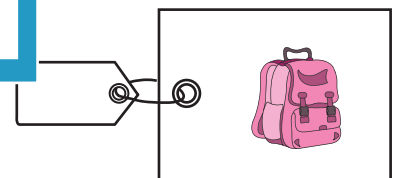


4) 



5) 

$$\underline{\quad} \div \underline{\quad} =$$



6) A set of storage boxes was priced at \$25. What was the price of each box, if there were 5 boxes in the set?

\_\_\_\_\_

**PREVIEW**

Gain complete access to the largest collection of worksheets in all subjects!

Members, please log in to download this worksheet.

Not a member? Please sign up to gain complete access.

[www.mathworksheets4kids.com](http://www.mathworksheets4kids.com)