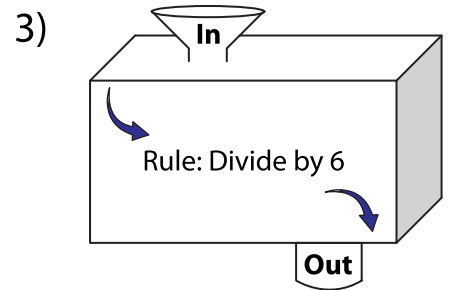
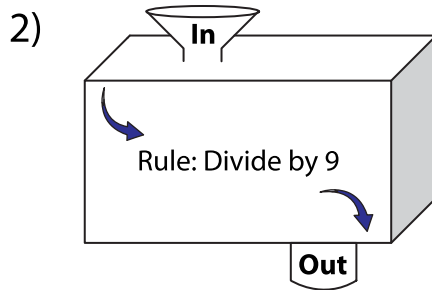
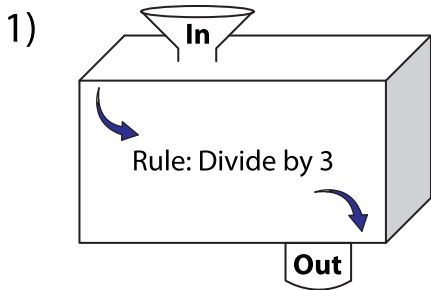


In and Out Boxes

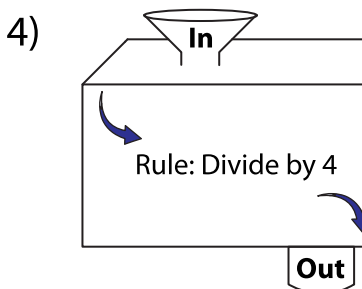
A) Complete the in and out boxes using the given rule.



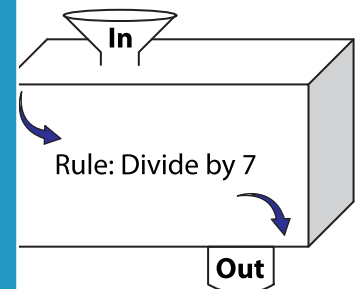
In	12	30
Out		

--	--	--	--

In	30	60	90
Out			



In		36
Out	7	



In		42	
Out	3		13

PREVIEW

Gain complete access to the largest collection of worksheets in all subjects!

Members, please log in to download this worksheet.

Not a member? Please sign up to gain complete access.

www.mathworksheets4kids.com

B) Write the rule.

