


Name : _____

Division - Arrays

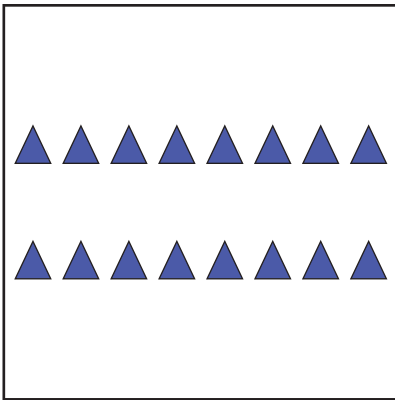


How many rows are there in the array? _____

How many columns are there in the array? _____

How many shapes are there in the array? _____

Write the division sentence that represents the array.

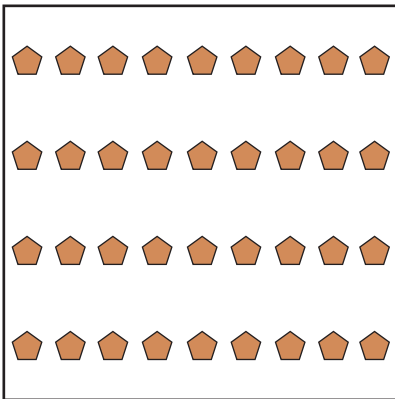


How many rows are there in the array? _____

How many columns are there in the array? _____

How many shapes are there in the array? _____

Write the division sentence that represents the array.



How many rows are there in the array? _____

How many columns are there in the array? _____

How many shapes are there in the array? _____

Write the division sentence that represents the array.



How many rows are there in the array? _____

How many columns are there in the array? _____

How many shapes are there in the array? _____

Write the division sentence that represents the array.
