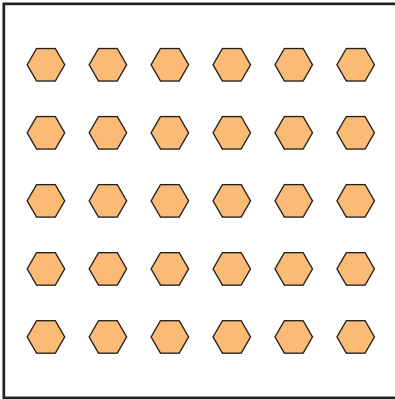


Name : _____

Division - Arrays




How many rows are there in the array? _____

How many columns are there in the array? _____

How many shapes are there in the array? _____

Write the division sentence that represents the array.




ay? _____

array? _____

array? _____

resents the array.



ay? _____

array? _____

array? _____

resents the array.


PREVIEW

Gain complete access to the largest collection of worksheets in all subjects!

Members, please log in to download this worksheet.

Not a member? Please sign up to gain complete access.

www.mathworksheets4kids.com



How many rows are there in the array? _____

How many columns are there in the array? _____

How many shapes are there in the array? _____

Write the division sentence that represents the array.
