


Division Sentence - Arrays

Complete each division sentence to describe the array.

1)



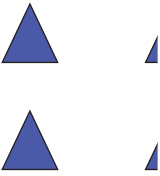
$$\square \div 4 = 4$$

2)




$$10 \div 5 = \square$$

3)

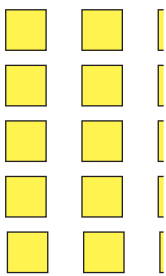


$$6 \div \square = 2$$

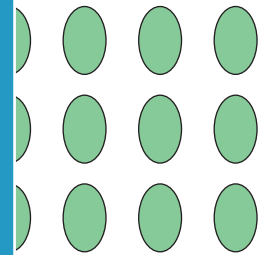


$$3 = 2$$

5)



$$25 \div \square = 5$$



$$\square = 5$$

PREVIEW


Gain complete access to the largest collection of worksheets in all subjects!

Members, please log in to download this worksheet.

Not a member? Please sign up to gain complete access.

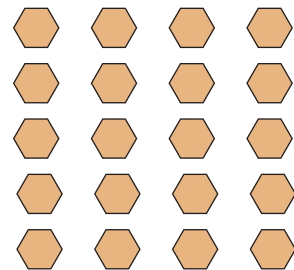
www.mathworksheets4kids.com

7)



$$\square \div 4 = 3$$

8)



$$20 \div 5 = \square$$