


# Division Sentence - Arrays

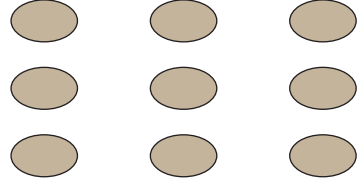
Complete each division sentence to describe the array.

1)




$$8 \div \square = 4$$

2)

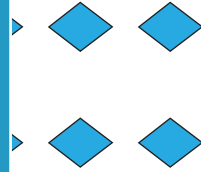


$$\square \div 3 = 3$$

3)




$$10 \div \square = 3$$




$$\square = 3$$

5)



$$\square \div \square = 5$$



$$4 = \square$$

## PREVIEW


Gain complete access to the largest collection of worksheets in all subjects!

Members, please log in to download this worksheet.

Not a member? Please sign up to gain complete access.


[www.mathworksheets4kids.com](http://www.mathworksheets4kids.com)

7)



$$16 \div \square = 4$$

8)



$$\square \div 3 = 4$$