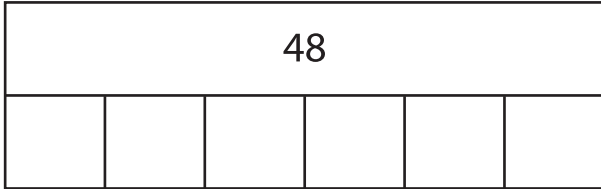


Name : _____

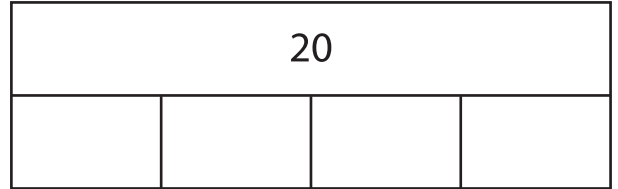
Division - Bar Model

Sheet 1

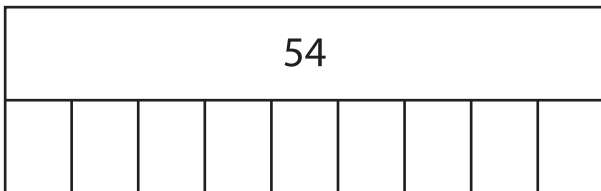
1) $48 \div 6 =$ _____



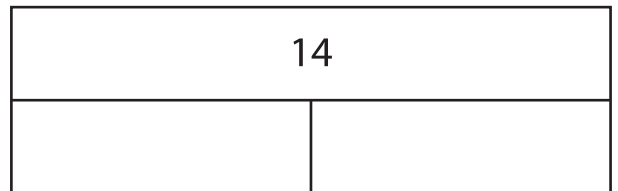
2) $20 \div 4 =$ _____



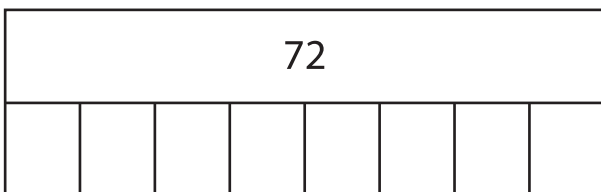
3) $54 \div 9 =$ _____



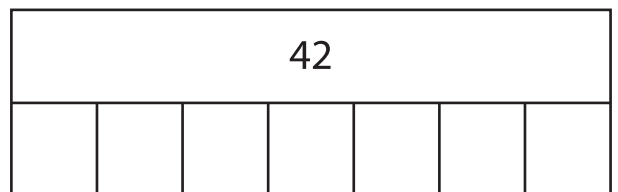
4) $14 \div 2 =$ _____



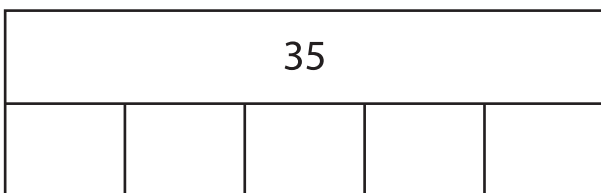
5) $72 \div 8 =$ _____



6) $42 \div 7 =$ _____



7) $35 \div 5 =$ _____



8) $27 \div 3 =$ _____

